



Esercizi sulle frazioni

Completare la tabella che segue, indicando – per ogni frazione – il numeratore ed il denominatore:

Frazione	Numeratore	Denominatore
1. $\frac{1}{2}$		
2. $\frac{3}{5}$		
3. $\frac{6}{7}$		
4. $\frac{8}{11}$		
5. $\frac{9}{5}$		
6. $\frac{11}{2}$		
7. $\frac{21}{8}$		
8. $\frac{12}{5}$		
9. $\frac{31}{12}$		
10. $\frac{1}{42}$		
11. $\frac{3}{1}$		
12. $\frac{12}{79}$		
13. $\frac{1}{100}$		
14. $\frac{45}{7}$		
15. $\frac{1000}{9}$		
16. $\frac{125}{41}$		





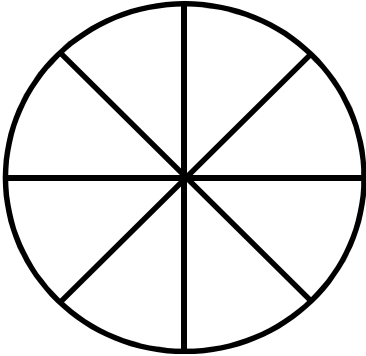
Scrivere come si leggono le seguenti frazioni:

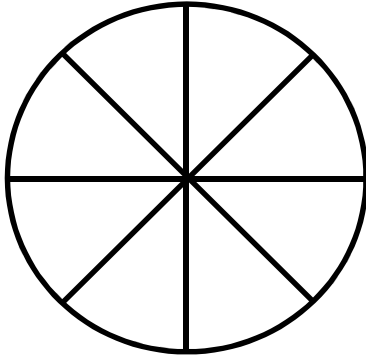


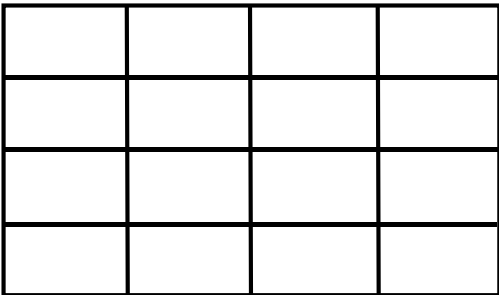
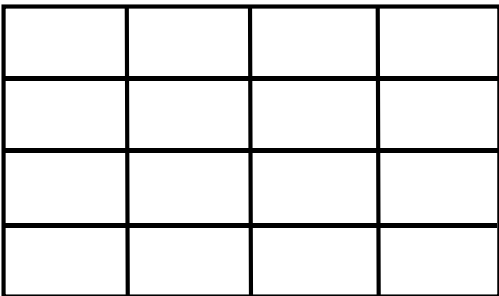
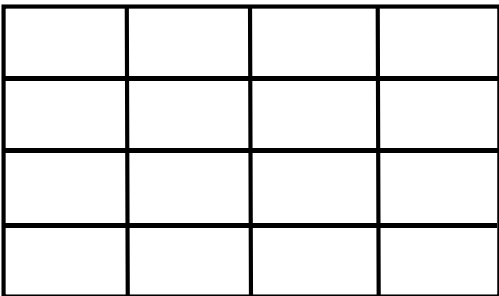
Frazione	Come si legge?
17. $\frac{1}{3}$	
18. $\frac{2}{5}$	
19. $\frac{6}{5}$	
20. $\frac{9}{7}$	
21. $\frac{3}{11}$	
22. $\frac{13}{3}$	
23. $\frac{21}{17}$	
24. $\frac{15}{7}$	
25. $\frac{34}{15}$	
26. $\frac{1}{41}$	
27. $\frac{7}{1}$	
28. $\frac{13}{59}$	
29. $\frac{3}{200}$	
30. $\frac{49}{5}$	
31. $\frac{2000}{7}$	
32. $\frac{129}{47}$	
33. $\frac{1001}{91}$	
34. $\frac{128}{51}$	







Scrivi in cifre le frazioni riportate a parole:

Frazione	Come si scrive?
35. Due terzi	
36. Sette quinti	
37. Undici dodicesimi	
38. Nove venticinquesimi	
39. Dodici ventitreesimi	
40. Diciotto undicesimi	
41. Ventidue quarantunesimi	
42. Trenta settimi	
43. Quaranta sessantunesimi	
44. Cinquanta primi	
45. Cinquatsette ventisettesimi	
46. Sessanta settimi	
47. Ottantacinque mezzi	
48. Novanta diciannovesimi	
49. Centotrentacinque terzi	
50. Milleduecento settantesimi	
51. Tremilacentodue venticinquesimi	
52. Cinquemilaseicentododici settantaseiesimi	

Rappresenta le frazioni sotto riportate colorando le figure a fianco:

53. $\frac{1}{4}$	
54. $\frac{3}{4}$	
55. $\frac{2}{8}$	
56. $\frac{5}{8}$	
57. $\frac{1}{8}$	

58. $\frac{6}{8}$	
59. $\frac{2}{16}$	
60. $\frac{9}{16}$	
61. $\frac{3}{16}$	
62. $\frac{7}{16}$	
63. $\frac{15}{16}$	

64. $\frac{5}{32}$	
65. $\frac{17}{32}$	
66. $\frac{25}{32}$	
67. $\frac{7}{64}$	
68. $\frac{15}{64}$	
69. $\frac{38}{64}$	
70. $\frac{57}{64}$	